

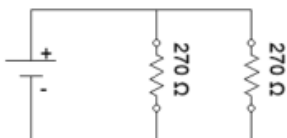
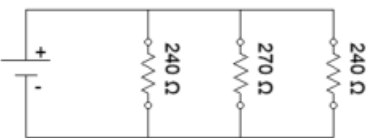
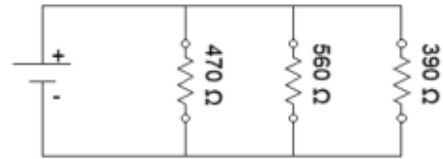
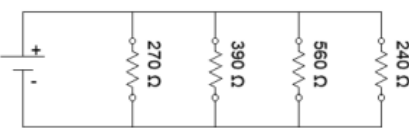
# Parallel Resistors Quiz and Lab

---

Name: \_\_\_\_\_

Calculate the resistance in each circuit and **record on this sheet** and in the corresponding quiz.

Then Setup the resistors on a breadboard. Measure the resistance in each circuit and **record on this sheet. Save this sheet** for the corresponding lab.

<p>1.</p>  <p>Calculated: Measured:</p>	<p>2.</p>  <p>Calculated: Measured:</p>
<p>3.</p>  <p>Calculated: Measured:</p>	<p>4.</p>  <p>Calculated: Measured:</p>